




NAME \_\_\_\_\_ DATE \_\_\_\_\_

## APPLICATION OF FRACTIONS TO TELL TIME

Time, shapes and fractions as equal parts of shapes.


1) Write the time shown on each analogue clock.

a)



\_\_\_\_\_

b)




\_\_\_\_\_

c)



\_\_\_\_\_

d)



\_\_\_\_\_